




TOLENTINO 10 DICEMBRE
2019

IL COCCODRILLO GOLOSONE






CIAO! IO SONO IL COCCODRILLO GOLOSONE E PENSO SOLO A RIEMPIRE IL MIO PANCIONE!


GUARDO DI QUA, GUARDO DI LÀ, E MANGIO SEMPRE E SOLO LA MAGGIORE QUANTITÀ.




MA SE LA QUANTITÀ È LA STESSA IN OGNI GRUPPO, NON SO COSA FARE E RESTO DI STUCCO. CHIUDO LA MIA BOCCA E GUAI A CHI MI TOCCA!



GOSONE MANGIA LE CANNUCCE





I SIMBOLI MATEMATICI

$3 > 2$ SI LEGGE:

3 È MAGGIORE DI 2

2 È MINORE DI 3

$3 = 3$ SI LEGGE:

3 È UGUALE A 3

$2 < 3$ SI LEGGE:

2 È MINORE DI 3

3 È MAGGIORE DI 2

METTO IL SEGNO GIUSTO

$9 \boxed{=} 9$

$4 \boxed{<} 8$

$5 \boxed{<} 7$

$9 \boxed{>} 8$

$2 \boxed{>} 0$

$1 \boxed{=} 1$

$5 \boxed{<} 8$

$6 \boxed{>} 5$



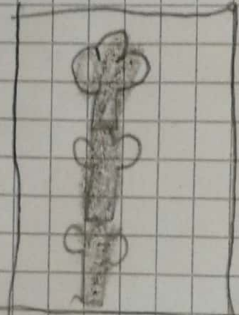
TOLENTINO 13 DICEMBRE

2019

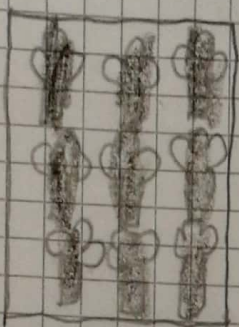
MAGGIORE E MINORE CON LE CARTE




>




5 > 3



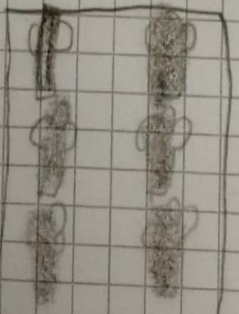
>



8 > 9



>




7 > 6



>



1 < 4



>



6 > 2

MAGGIORRE MINORE UGUALE

N E CON LE MARACS



>




$5 > 4$



<




$4 < 5$




=




$1 = 1$




<




$4 < 6$



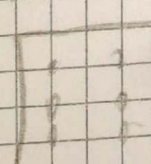
>




$5 > 1$



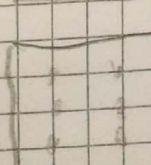
<



$5 < 6$



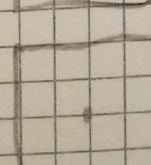
<



$2 < 6$




>



$3 > 1$




<



$2 < 5$



>



$2 > 1$

MAGGIORE E MINORE CON CARTELLINI

1

<

18

16

>

3

8

>

2

12

<

17

9

<

15

14

>

11

7

>

5

13


>

10

MAGGIORE MINORE E UGUO CON I DADI



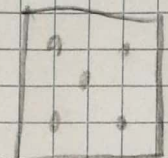
>




$$9 > 7$$



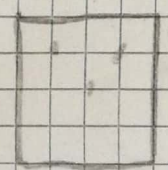
=



$$5 = 5$$



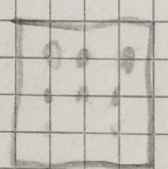
=



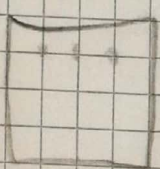
$$3 = 3$$




>



$$7 > 6$$



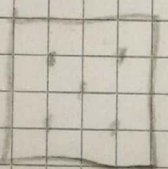
>



$$3 > 1$$



<




$$3 < 5$$

DADO GRANDE VS PICCOLO



=



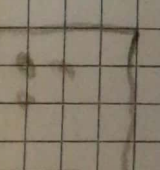
$$3 = 3$$



<



$$2 < 6$$



<



$$3 < 6$$

UAI





> 11 6 1/2




< 11 1/5

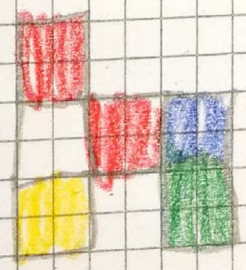
CON I MATTONCINI



6/8



>



10/6



0

LA MAESTRA DELLA SCUOLA DEGLI ANIMALI DEVE FORMARE LE CLASSI E DECIDERE DOVE ANDRANNO I PICCOLI GUFETTI: IN PRIMA ANDRANNO GLI ANIMALI DI 6 ANNI, IN SECONDA QUELLI DI 7, IN TERZA QUELLI DI 8, IN QUARTA QUELLI DI 9 E IN QUINTA QUELLI DI 10.

- GUFU RUFO HA 6 ANNI
- GUFETTA ROSSETTA HA 2 ANNI IN PIÙ DI GUFU RUFO
- GUFETTA LISETTA HA UN ANNO IN MENO DI ROSSETTA
- GUFU MUFO HA 3 ANNI IN PIÙ DI RUFO
- GUFU TUFO È IL PIÙ GRANDE DI TUTTI
- GUFETTA VIOLETTA, INVECE, HA 4 ANNI IN MENO DI GUFU TUFO



COME VERRANNO DISTRIBUITI I GUFU NELLE CLASSI?

PRIMA	SECONDA	TERZA	QUARTA	QUINTA
RUFO	LISETTA ROSSETTA	MUFO	TUFO	
VIOLETTA				

RUFO 6
 ROSSETTA 8
 LISETTA 7
 MUFO 9
 TUFO 10
 VIOLETTA 6